

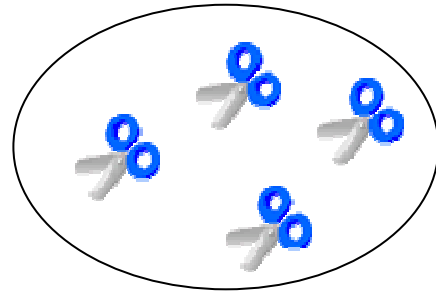

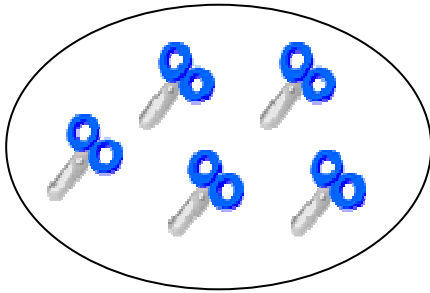




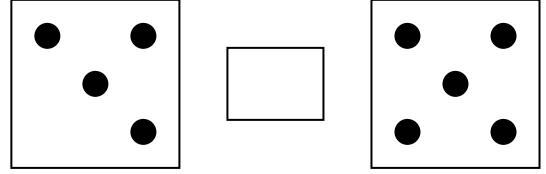

التاريخ: _____

أوراق عمل للصف الأول







الاسم: _____

التعرف على الاشارات

1) أكتب الإشارة الملائمة = أو \neq :-



(2) أكتب إشارة < ، > أو = :-



$9 \square 9$

$0 \square 9$

$9 \square 8$

$3 \square 3$

$2 \square 10$

$11 \square 1$

$2 \square 7$


$8 \square 8$

$10 \square 0$


$9 \square 9$

$3 \square 10$

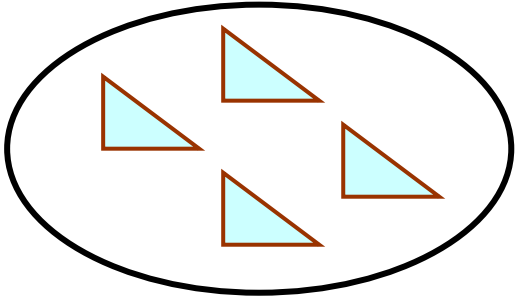
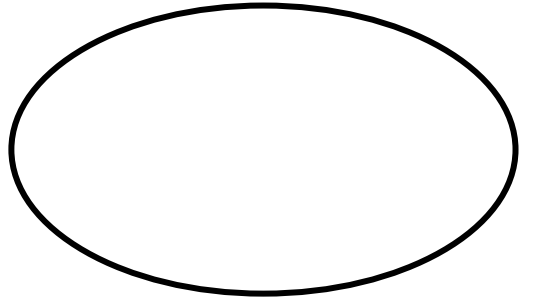
$8 \square 3$



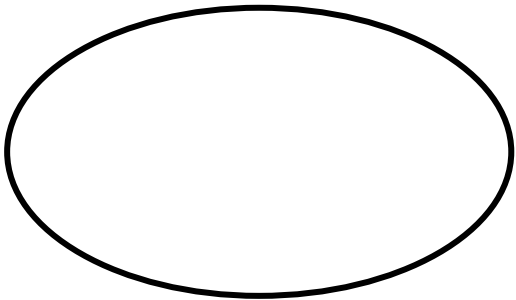
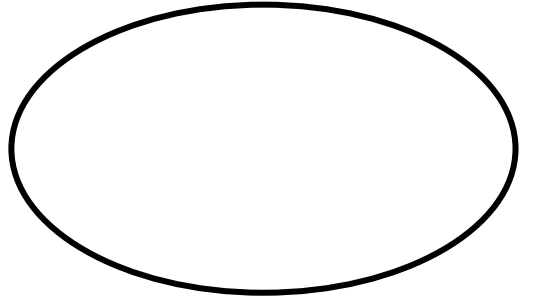
3) ارسم كمية ملائمة: -



>

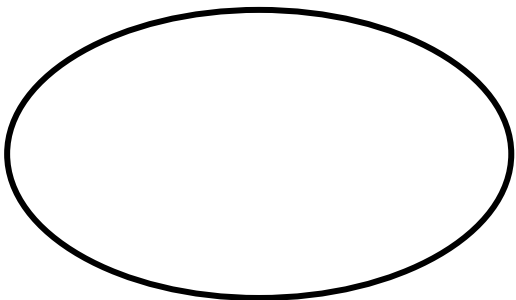


>



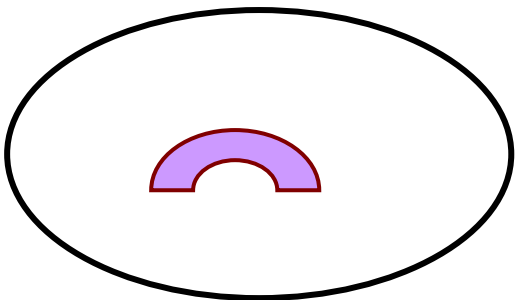

=

7

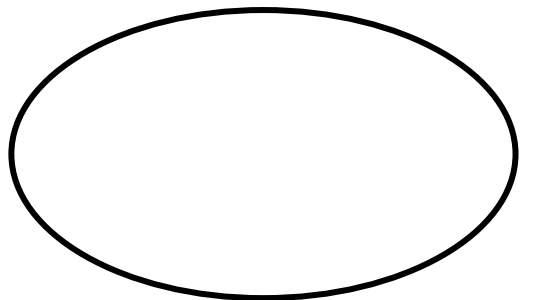


>

5



=



4) أكمل أعدادًا ملائمة: -

$8 < \square$

$9 \neq \square$

$9 > \square$

$10 < \square$

$8 = \square$

$6 > \square$

$7 > \square$

$3 \neq \square$

$5 = \square$

$2 < \square$

$1 < \square$

$7 < \square$

$5 > \square$

$3 > \square$

$9 > \square$

$7 \neq \square$

$2 \neq \square$

$4 \neq \square$

5) ارسم كميات ملائمة لتصح الإشارة: -

